

Name:

Klasse:

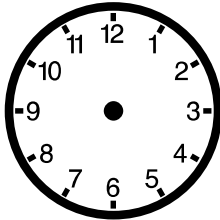
Datum:

Uhrzeit

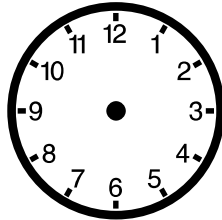
Viel Erfolg!



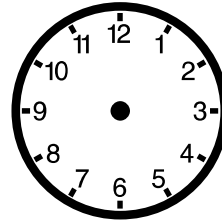
Zeichne die Zeiger passend zur Uhrzeit in die Uhren ein.



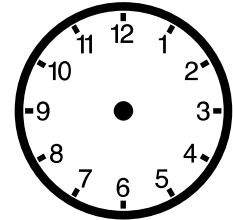
1:30 Uhr



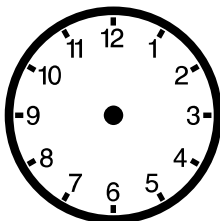
16:30 Uhr



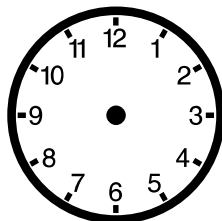
20:30 Uhr



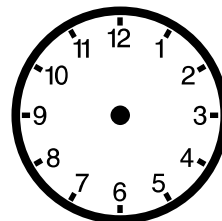
14:30 Uhr



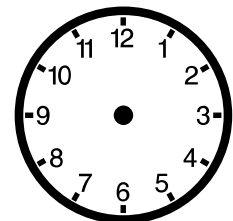
18:30 Uhr



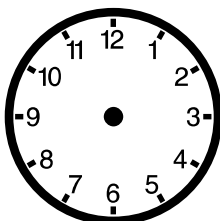
7:30 Uhr



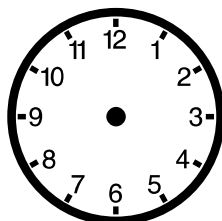
11:30 Uhr



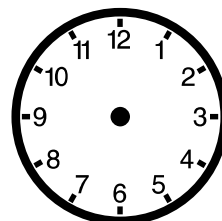
15:30 Uhr



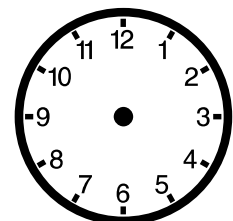
0:30 Uhr



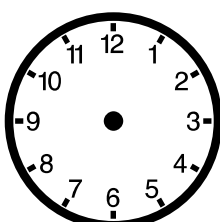
2:30 Uhr



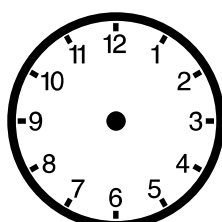
8:30 Uhr



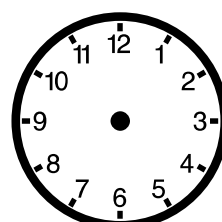
21:30 Uhr



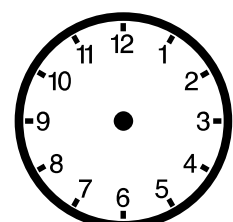
22:30 Uhr



17:30 Uhr



3:30 Uhr



23:30 Uhr

Name:

Klasse:

Datum:


Lösung

Uhrzeit

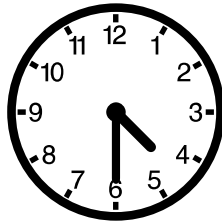
Viel Erfolg!




Zeichne die Zeiger passend zur Uhrzeit in die Uhren ein.




1:30 Uhr




16:30 Uhr




20:30 Uhr




14:30 Uhr



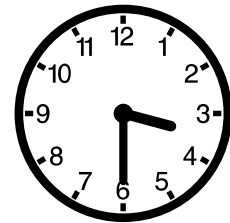
18:30 Uhr




7:30 Uhr




11:30 Uhr




15:30 Uhr




0:30 Uhr




2:30 Uhr




8:30 Uhr




21:30 Uhr




22:30 Uhr



17:30 Uhr



3:30 Uhr



23:30 Uhr